





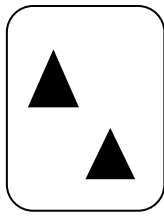

Fișă de lucru clasa pregătitoare

Șeitan Aura Zlatița  
Liceul Teoretic William Shakespeare Timișoara

1. Ordonează următoarele numere în ordine crescătoare: 3, 4, 0, 8, 1, 10, 7, 5, 2, 6, 9.

--	--	--	--	--	--	--	--	--	--	--	--	--	--	--	--	--	--	--	--	--

2. Completează cu cifre sau simboluri reprezentările date:



4
---

--

7
---

--

--

10
----

3. Scrie vecinii numerelor:

	4	
--	---	--

	7	
--	---	--

	1	
--	---	--

	8	
--	---	--

	3	
--	---	--

	9	
--	---	--

	5	
--	---	--

	2	
--	---	--

3. Din perechile de numere date colorează:

a) cu roșu numărul cel mai mare

b) cu albastru numărul cel mai mic

2
---

12
----

17
----

27
----

5
---

9
---

3
---

13
----

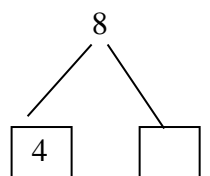
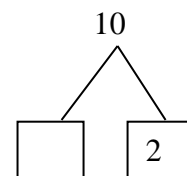
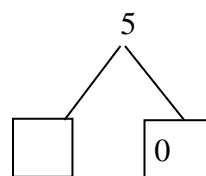
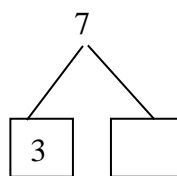
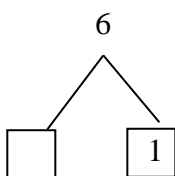
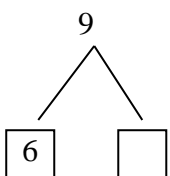
10
----

15
----

9
---

6
---

4. Descompune numerele :



5. Calculează:

$3 + 2 =$

$8 - 3 =$

$7 + 1 =$

$2 + 2 =$

$9 + 1 =$

$5 + 3 =$

$10 - 5 =$

$6 - 6 =$

$9 - 2 =$

$7 - 0 =$